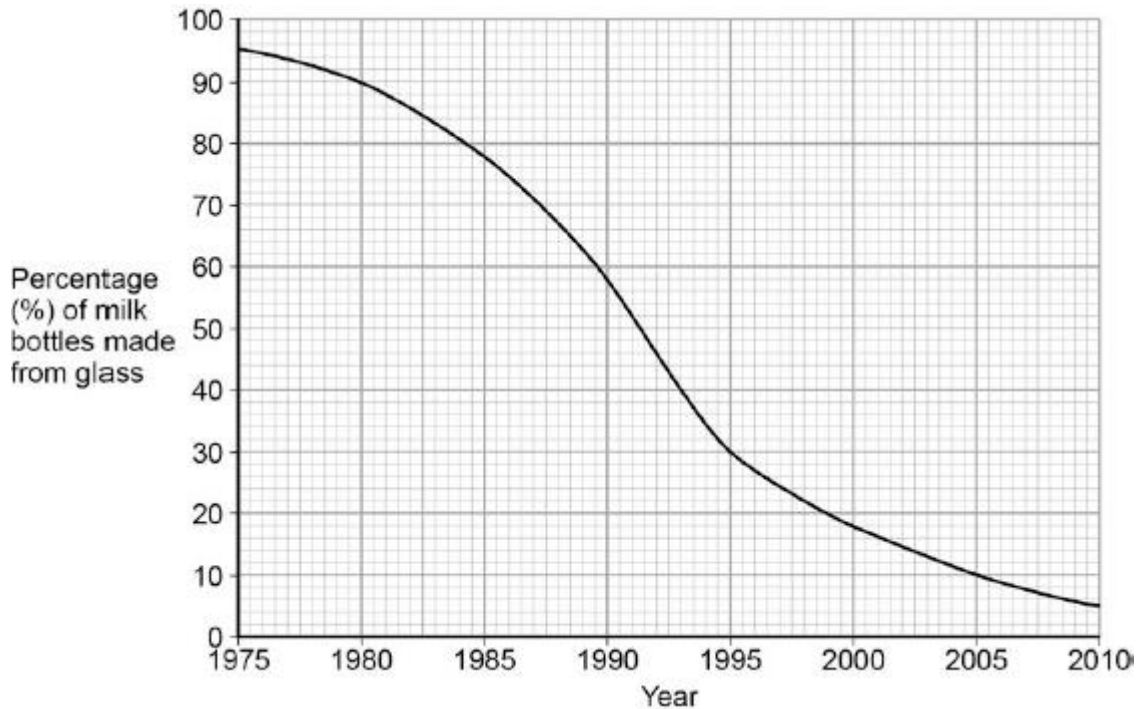


Q1.Plastic and glass can be used to make milk bottles.

The figure below shows the percentage of milk bottles made from glass between 1975 and 2010.



(a) Plot the points and draw a line on the figure above to show the percentage of milk bottles made from materials **other** than glass between 1975 and 2010.

(3)

(b) The table below gives information about milk bottles.

	Glass milk bottle	Plastic milk bottle
Raw materials	Sand, limestone, salt	Crude oil
Bottle material	Soda-lime glass	HD poly(ethene)
Initial stage in production of bottle material	Limestone and salt used to produce sodium carbonate.	Production of naphtha fraction.
Maximum temperature in production process	1600 °C	850 °C
Number of times bottle can be used for milk	25	1

Size(s) of bottle	0.5 dm ³	0.5 dm ³ , 1 dm ³ , 2 dm ³ , 3 dm ³
Percentage (%) of recycled material used in new bottles	50 %	10 %

Evaluate the production and use of bottles made from soda-lime glass and those made from HD poly(ethene).

Use the information given and your knowledge and understanding to justify your choice of material for milk bottles.

.....

.....

.....

.....

.....

.....

.....

.....

.....

.....

(6)
(Total 9 marks)

Q2. This question is about organic compounds.

Hydrocarbons can be cracked to produce smaller molecules.

The equation shows the reaction for a hydrocarbon, $C_{18}H_{38}$



(a) Which product of the reaction shown is an alkane?

Tick **one** box.

C_2H_4

C_3H_6

C_4H_8

C_6H_{14}

(1)

(b) The table below shows the boiling point, flammability and viscosity of $C_{18}H_{38}$ compared with the other hydrocarbons shown in the equation.

	Boiling point	Flammability	Viscosity
A	highest	lowest	highest
B	highest	lowest	lowest
C	lowest	highest	highest
D	lowest	highest	lowest

Which letter, **A**, **B**, **C** or **D**, shows how the properties of $C_{18}H_{38}$ compare with the properties of C_2H_4 , C_3H_6 , C_4H_8 and C_6H_{14} ?

Tick **one** box.

A

B

C


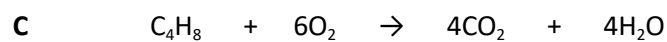
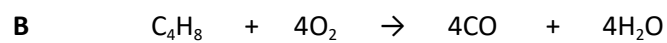

D

(1)

(c) The hydrocarbon C_4H_8 was burnt in air.

Incomplete combustion occurred.

Which equation, **A**, **B**, **C** or **D**, correctly represents the incomplete combustion reaction?



Tick **one** box.

A

B

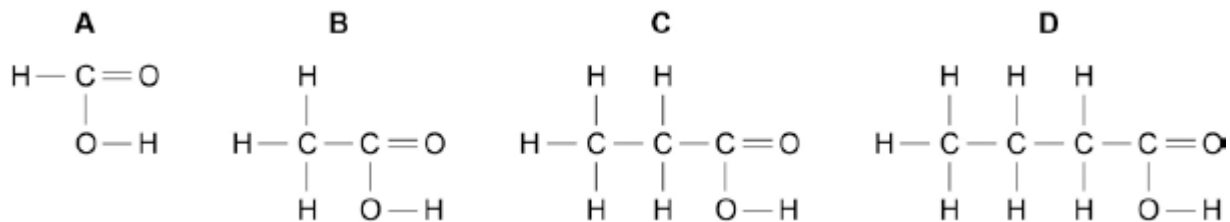
C

D

(1)

(d) Propanoic acid is a carboxylic acid.

Which structure, **A**, **B**, **C** or **D**, shows propanoic acid?



Tick **one** box.

A

B

C

D

(1)

(e) Propanoic acid is formed by the oxidation of which organic compound?

Tick **one** box.

Propane

Propene

Propanol

Polyester

(1)
(Total 5 marks)

Q3.Crude oil is a mixture of many different chemical compounds.

(a) Fuels, such as petrol (gasoline), can be produced from crude oil.

(i) Fuels react with oxygen to release energy.

Name the type of reaction that releases energy from a fuel.

.....

(1)

(ii) Fuels react with oxygen to produce carbon dioxide.

The reaction of a fuel with oxygen can produce a different oxide of carbon.

Name this different oxide of carbon and explain why it is produced.

.....

.....

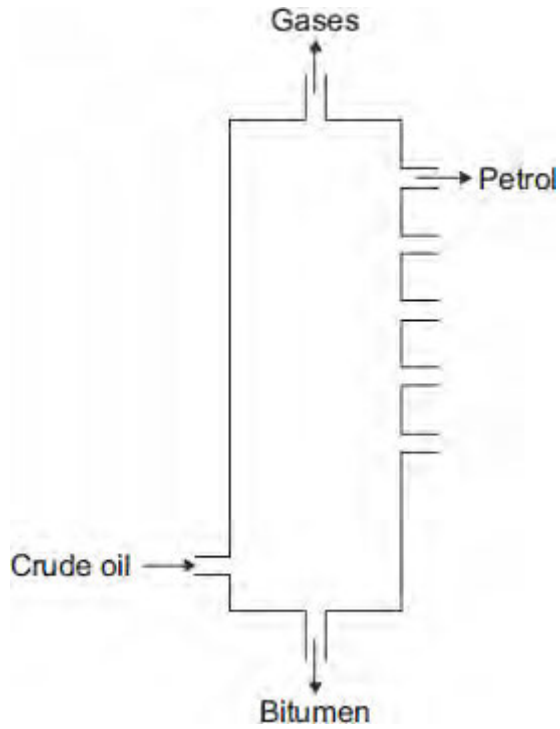
.....

.....

(2)

(b) Most of the compounds in crude oil are hydrocarbons.

Hydrocarbons with the smallest molecules are very volatile.



In this question you will be assessed on using good English, organising information clearly and using specialist terms where appropriate.

Describe and explain how **petrol** is separated from the mixture of hydrocarbons in crude oil.

Use the diagram and your knowledge to answer this question.

.....

.....

.....

.....

.....

.....

.....

.....

.....

.....

.....
.....

(6)
(Total 9 marks)

- Q4.** A mixture of petrol and air is burned in a car engine.
Petrol is a mixture of alkanes. Air is a mixture of gases.

The tables give information about the composition of petrol and the composition of air.

Petrol		Air	
Alkane	Formula	Gas	Percentage (%)
hexane	C ₆ H ₁₄	nitrogen	78
heptane		oxygen	21
octane	C ₈ H ₁₈	carbon dioxide	0.035
nonane	C ₉ H ₂₀	Small amounts of other gases and water vapour	
decane	C ₁₀ H ₂₂		

- (a) Use the information above to answer these questions.

- (i) Give the formula for heptane

.....



(1)

- (ii) Complete the general formula of alkanes.
n = number of carbon atoms



(1)

- (b) Alkanes in petrol burn in air.
The equations represent two reactions of hexane burning in air.



Reaction 2 produces a different carbon compound to **Reaction 1**.

- (i) Name the carbon compound produced in **Reaction 2**.

.....

(1)

(ii) Give a reason why the carbon compounds produced are different.

.....
.....

(1)

(c) The table shows the percentages of some gases in the exhaust from a petrol engine.

Name of gas	Percentage (%)
nitrogen	68
carbon dioxide	15
carbon monoxide	1.0
oxygen	0.75
nitrogen oxides	0.24
hydrocarbons	0.005
sulfur dioxide	0.005
other gases	

(i) What is the percentage of the other gases in the table?

.....

(1)

(ii) What is the name of the compound that makes up most of the other gases?

.....

(1)

(iii) Give a reason why sulfur dioxide is produced in a petrol engine.

.....
.....

(1)

(iv) State how nitrogen oxides are produced in a petrol engine.

.....
.....
.....
.....

(2)

(d) Many scientists are concerned about the carbon dioxide released from burning fossil fuels such as petrol.

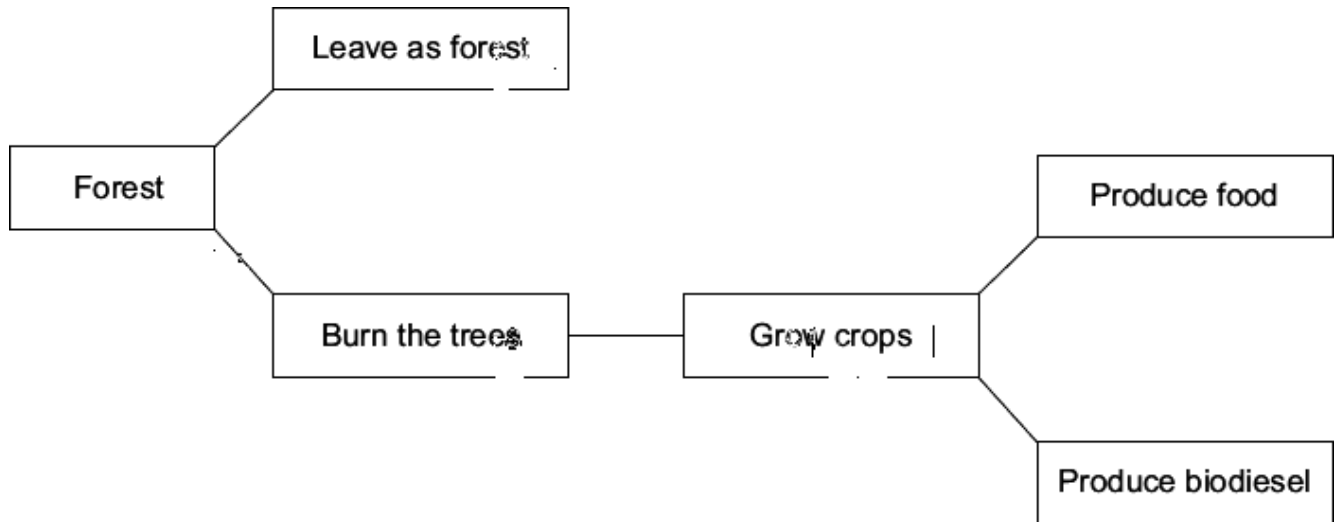
Explain why.

.....
.....
.....
.....

(2)

(Total 11 marks)

Q5. Petroleum diesel is a fuel made from crude oil.
 Biodiesel is a fuel made from vegetable oils.
 To make biodiesel, large areas of land are needed to grow crops from which the vegetable oils are extracted.
 Large areas of forest are cleared by burning the trees to provide more land for growing these crops.



(a) Use this information and your knowledge and understanding to answer these questions.

(i) Carbon neutral means that there is no increase in the amount of carbon dioxide in the atmosphere.

Suggest why adverts claim that using biodiesel is carbon neutral.

.....

.....

.....

.....

.....

.....

.....

(2)

(ii) Explain why clearing large areas of forest has an environmental impact on the atmosphere.

.....

.....
.....
.....
.....
.....

(2)

(b) Why is there an increasing demand for biodiesel?

.....
.....

(1)

(c) Suggest why producing biodiesel from crops:

(i) causes ethical concerns

.....
.....

(1)

(ii) causes economic concerns.

.....
.....

(1)

(Total 7 marks)

Q6. About 3000 million years ago, carbon dioxide was one of the main gases in the Earth's atmosphere.

About 400 million years ago, plants and trees grew on most of the land. When the plants and trees died they were covered by sand and slowly decayed to form coal.

(a) Describe and explain how the composition of the Earth's atmosphere was changed by the formation of coal.

.....
.....
.....
.....
.....
.....
.....
.....

(3)

(b) Today, coal is burned in power stations to release the energy needed by industry. Carbon dioxide, water and sulfur dioxide are produced when this coal is burned.

Name **three** elements that are in this coal.

.....
.....
.....

(2)

(c) In some power stations coal is mixed with calcium carbonate (limestone). The mixture is crushed before it is burned.

(i) Many chemical reactions happen when this mixture is burned. The chemical equation represents one of these reactions.

Balance the chemical equation.



(1)

(ii) Explain how the use of calcium carbonate in the mixture:

increases atmospheric pollution

.....
.....
.....
.....

decreases atmospheric pollution.

.....
.....
.....
.....

(4)

(Total 10 marks)